

HW 2 — Due: September 12, 4 PM

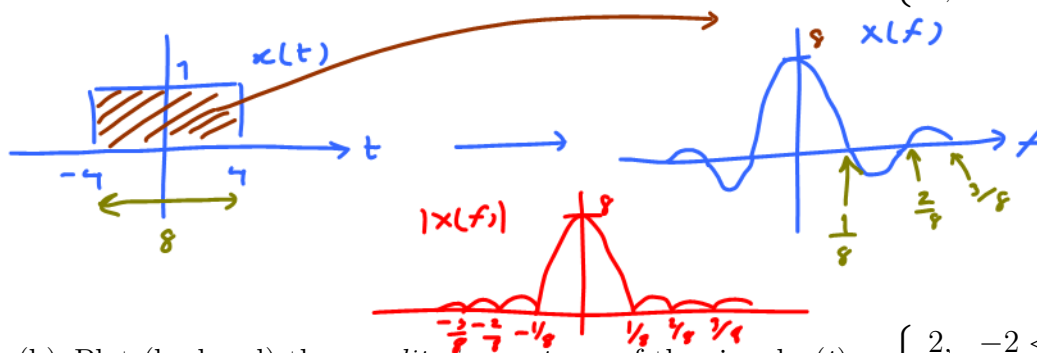
Lecturer: Prapun Suksompong, Ph.D.

Instructions

- This assignment has 7 pages. Some MATLAB scripts are available from http://www2.siit.tu.ac.th/prapun/ecs332/ECS332_2018_HW_2_MATLAB.zip.
- (1 pt) Work and write your answers **directly on these provided sheets** (not on other blank sheet(s) of paper). Hard-copies are distributed in class.
- (1 pt) Write your first name and the last three digits of your student ID on the upper-right corner of this page.
- (8 pt) Try to solve all non-optional problems.
- Late submission will be heavily penalized.

Problem 1.

- Plot (by hand) the *amplitude spectrum* of the signal $x(t) = \begin{cases} 1, & -4 < t < 4, \\ 0, & \text{otherwise.} \end{cases}$



- Plot (by hand) the *amplitude spectrum* of the signal $x(t) = \begin{cases} 2, & -2 < t < 2, \\ 0, & \text{otherwise.} \end{cases}$

- (c) Plot (by hand) the *amplitude spectrum* of the signal $x(t) = \begin{cases} 2, & -3 < t < 1, \\ 0, & \text{otherwise.} \end{cases}$

Recall:

$$g(t) = x(t - t_0)$$

$$|G(f)| = |X(f)|$$

Problem 2. ¹ Using MATLAB to find the (amplitude) spectrum² of a signal:

A signal $g(t)$ can often be expressed in analytical form as a function of time t , and the Fourier transform is defined as the integral of $g(t) \exp(-j2\pi ft)$. Often however, there is no analytical expression for a signal, that is, there is no (known) equation that represents the value of the signal over time. Instead, the signal is defined by measurements of some physical process. For instance, the signal might be the waveform at the input to the receiver, the output of a linear filter, or a sound waveform encoded as an mp3 file.

In all these cases, it is not possible to find the spectrum by analytically performing a Fourier transform. Rather, the discrete Fourier transform (or DFT, and its cousin, the more rapidly computable fast Fourier transform, or FFT) can be used to find the spectrum or frequency content of a measured signal. The MATLAB function `plotspect.m`, which plots the spectrum of a signal can be downloaded from our course website. Its help portion³ notes

```
% plotspect(x,t) plots the spectrum of the signal x
% whose values are sampled at time (in seconds) specified in t
```

- (a) The function `plotspect.m` should be straightforward to use. For instance, the spectrum of a rectangular pulse⁴ $g(t) = 1[0 \leq t \leq 2]$ can be found using:

¹Based on [Johnson, Sethares, and Klein, 2011, Sec 3.1 and Q3.3].

²also referred to by “amplitude spectrum” or simply “spectrum”

³You can view the “help” portion for a MATLAB function `xxx` by typing `help xxx` at the MATLAB prompt. If you get an error such as `xxx not found`, then this means either that the function does not exist, or that it needs to be moved into MATLAB’s search path.

⁴Here, we define a rectangular pulse using the indicator function $1[\cdot]$. This function outputs a 1 when the statement inside the square brackets is true; otherwise, it outputs a 0. For example,

$$1[0 \leq t \leq 2] = \begin{cases} 1, & 0 \leq t \leq 2, \\ 0, & \text{otherwise.} \end{cases}$$

```

% spectrect.m plot the spectrum of a square wave
close all
Ts=1/100;           % time interval between adjacent samples
t=0:Ts:20;         % create a time vector
x=[t <= 2];       % rectangular pulse $1[0 \leq t \leq 2]$
plotspect(x,t)     % call plotspect to draw spectrum
xlim([-5,5])       % look only from f = -5 to f = 5 Hz

```

The output of `spectrect.m` is shown in Figure 2.1. The top plot shows the first 20 seconds of $g(t)$. The bottom plot shows $|G(f)|$.

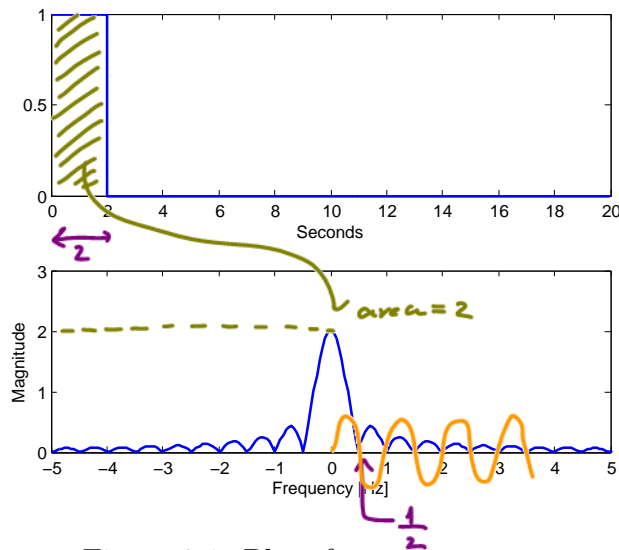


Figure 2.1: Plots from `spectrect.m`

- (i) Use what we studied in class about the Fourier transform of a rectangular pulse (and the time-shift property) to find a simplified expression for $|G(f)|$.

$$2 |\operatorname{sinc}(2\pi f)|$$

- (ii) Use `MATLAB` to plot your analytical expression derived in part (i). Did your plot agree with the lower plot in Figure 2.1? Attach the printed plot on another page;

$$2-3 \quad 2 |\operatorname{sinc}_{\text{MATLAB}}(2f)|$$

write the page number as page 2-8. (Remark: There will be more plots to be put on this page.)

Caution: The built-in `sinc` function in MATLAB is defined using the normalized version. So, you will need to remove a factor of π from the argument of each sinc function found in part (i) when you type it into MATLAB.

(b) Now consider an exponential pulse

$$s(t) = e^{-t}u(t) = \begin{cases} e^{-t}, & t \geq 0, \\ 0, & \text{otherwise.} \end{cases}$$

- (i) Modify the code in `spectrect.m` to show the (magnitude) spectrum $|S(f)|$. Include the printed plot on page 2-8.
- (ii) Find $S(f)$ and $|S(f)|$ analytically. (Hopefully, you still remember how to integrate exponential function.)

$$\begin{aligned} s(f) &= \int_{-\infty}^{\infty} s(t) e^{-j2\pi ft} dt = \int_0^{\infty} e^{-t} e^{-j2\pi ft} dt = \int_0^{\infty} e^{-(1+j2\pi f)t} dt \\ &\stackrel{\text{Direct FT}}{=} \frac{1}{-(1+j2\pi f)} e^{-(1+j2\pi f)t} \Big|_0^{\infty} = -\frac{1}{1+j2\pi f} (0 - 1) = \frac{1}{1+j2\pi f} \\ |s(f)| &= \frac{1}{\sqrt{1^2 + (2\pi f)^2}} = \frac{1}{\sqrt{1 + (2\pi f)^2}} \end{aligned}$$

- (iii) Plot your analytical expression in part (ii) and compare with the plot in part (i). Include the printed plot on page 2-8.
- (iv) MATLAB can also perform symbolic manipulation when symbolic toolbox is installed. It can find the Fourier transform of a symbolic expression via the command `fourier`. Unfortunately, the `fourier` command use the ω -version of the definition. So, to convert the answer to the f -version, we also need to substitute $\omega = 2\pi f$. This is done automatically in our provided function `fourierf`. Run the file `SymbFourier.m`. Check whether you have the same result as part (ii).

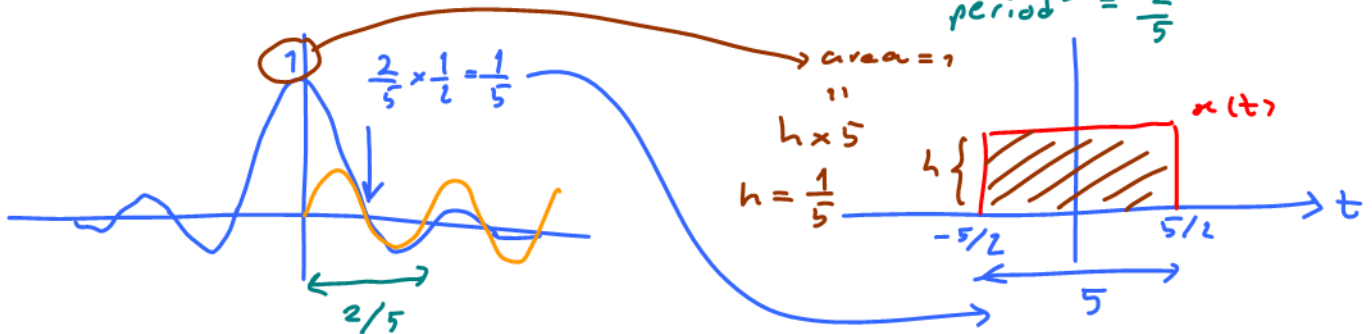
Problem 3.

(a) Suppose the Fourier transform of a signal $x(t)$ is given by

$$X(f) = \frac{\sin(5\pi f)}{5\pi f} = \text{sinc}(5\pi f) = \sin\left(2\pi\left(\frac{5}{2}\right)f\right)$$

"freq" = $\frac{5}{2}$
 "period" = $\frac{2}{5}$

(i) Plot (by hand) $x(t)$.



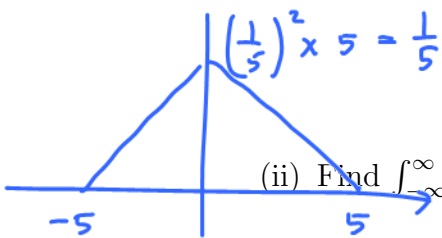
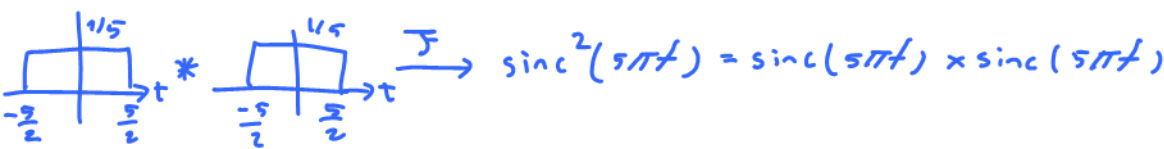
(ii) Find $\int_{-\infty}^{\infty} X(f)df$. (Hint: This integration is exactly the inverse Fourier transform formula with $t = 0$.)

$$\int_{-\infty}^{\infty} g(t) dt = G(0) \quad \int_{-\infty}^{\infty} G(f) df = g(0) \quad \int_{-\infty}^{\infty} X(f) df = x(t) \Big|_{t=0} = \frac{1}{5}$$

(b) Suppose the Fourier transform of a signal $y(t)$ is given by

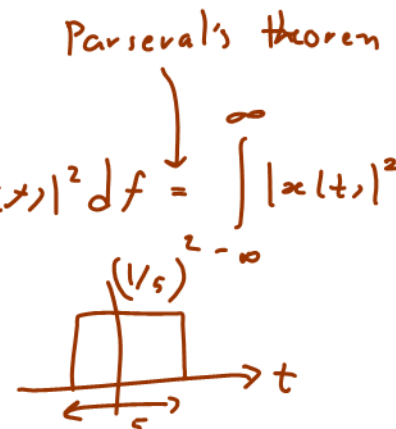
$$Y(f) = \text{sinc}^2(5\pi f) = \left(\frac{\sin(5\pi f)}{5\pi f}\right)^2$$

(i) Plot (by hand) $y(t)$.



(ii) Find $\int_{-\infty}^{\infty} Y(f)df$. = $y(t) \Big|_{t=0} = \frac{1}{5}$

Method 2: $\int_{-\infty}^{\infty} Y(f) df = \int_{-\infty}^{\infty} X^2(f) df = \int_{-\infty}^{\infty} |X(f)|^2 df = \int_{-\infty}^{\infty} |x(t)|^2 dt$



Problem 4. The Fourier transform of the triangular pulse $g(t)$ in Figure 2.2a is given as

$$G(f) = \frac{1}{(2\pi f)^2} (e^{j2\pi f} - j2\pi f e^{j2\pi f} - 1)$$

Using this information, and the time-shifting and time-scaling properties, find the Fourier transforms of the signals shown in Figure 2.2b, c, d, e, and f.

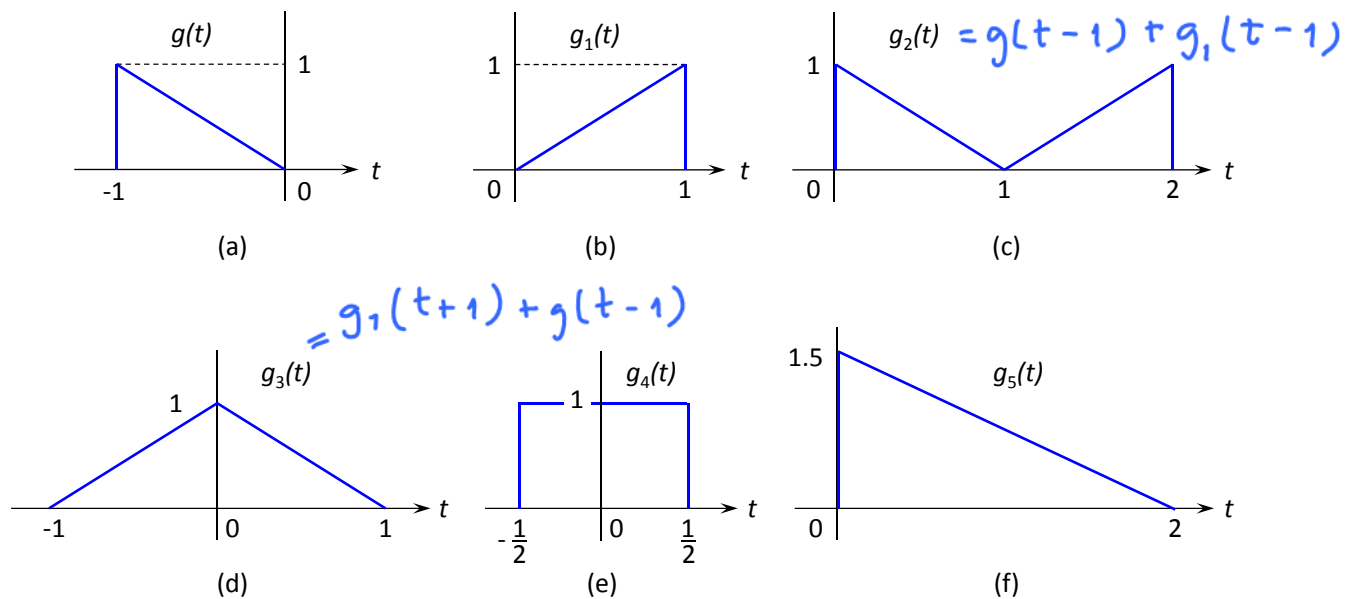


Figure 2.2: Problem 4

Remark: Don't forget to simplify your answers. For example, the answer in part (d) should be of the form $\text{sinc}^2(\cdot)$ and the answer in part (e) should be of the form $\text{sinc}(\cdot)$

$$g_1(t) = g(-t) = g(at), \quad a = -1$$

$$g(at) \xrightarrow{\mathcal{F}} \frac{1}{|a|} G\left(\frac{f}{a}\right) = G(-f)$$

$$G_1(f) = G(-f) = \frac{1}{(2\pi f)^2} (e^{-j2\pi f} + j2\pi f e^{-j2\pi f} - 1)$$

Extra Question

Here is an optional question for those who want more practice.

Problem 5. Listen to the Fourier's Song (Fouriers_Song.mp3) which can be downloaded from <http://sethares.engr.wisc.edu/mp3s/fourier.html>

Which properties of the Fourier Transform can you recognize from the song? List them here.